

























# Mystery Money Grid





































Can you work out what the missing coins are?

|       | £0.39   | £0.35   | £0.38   | £0.54  | £0.57   | £0.45   |
|-------|---|---|---|--|---|---|
| £0.48 |    |   |    |    |   |    |
| £0.46 |    |    |   |    |    |   |
| £0.66 |  |   |  |  |  |   |
| £0.43 |  |  |  |  |   |   |
| £0.31 |  |  |  |  |   |  |
| £0.34 |  |   |   |  |  |  |



# Mystery Money Grid

Can you work out what the missing coins are?

|       | £0.39   | £0.35   | £0.38   | £0.54  | £0.57   | £0.45   |
|-------|---|---|---|--|---|---|
| £0.48 |    |    |    |    |    |    |
| £0.46 |    |    |    |    |    |    |
| £0.66 |  |  |  |  |  |  |
| £0.43 |  |  |  |  |  |  |
| £0.31 |  |  |  |  |  |  |
| £0.34 |  |  |  |  |  |  |

